

348.

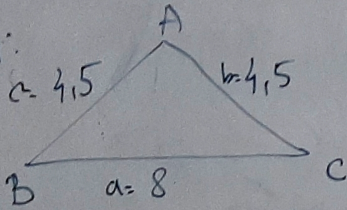
Д)  $a = 8 \text{ cm}$   
 $b = 4,5 \text{ cm}$   
 $c = 4,5 \text{ cm}$   
 $\Delta ABC = ?$

$8 + 4,5 > 4,5 \checkmark$   
 $8 + 4,5 > 4,5 \checkmark$   
 $4,5 + 4,5 > 8$   
 $9 > 8 \checkmark$

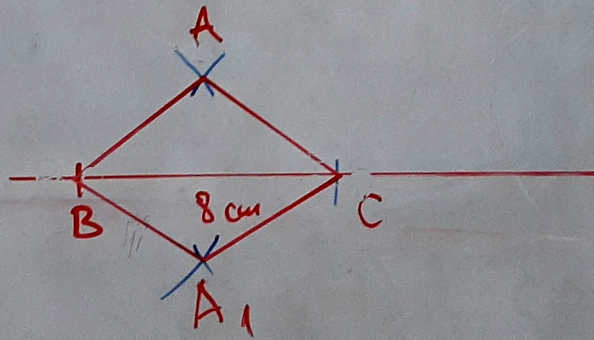
Ломаный  
348.г)

349. 8

СКИЦА:



$\Delta ABC$   
РЕШЕНИЕ:  $\Delta A_1BC$

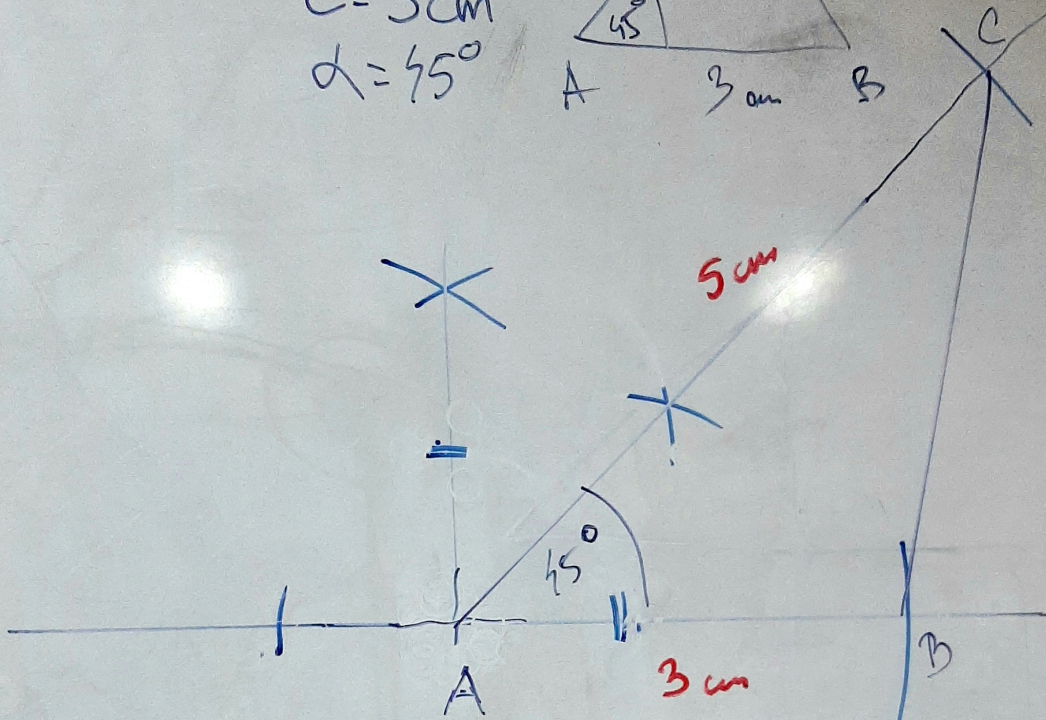
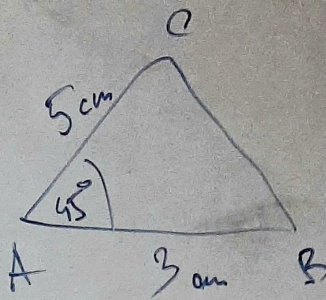




# КОНСТРУКЦИЈЕ ТРОУГЛОВА

-ВЕЖБАЊЕ-

349. δ)  $b = 5 \text{ cm}$   
 $c = 3 \text{ cm}$   
 $\alpha = 45^\circ$



$\triangle OMABY$

349. A)

350.)

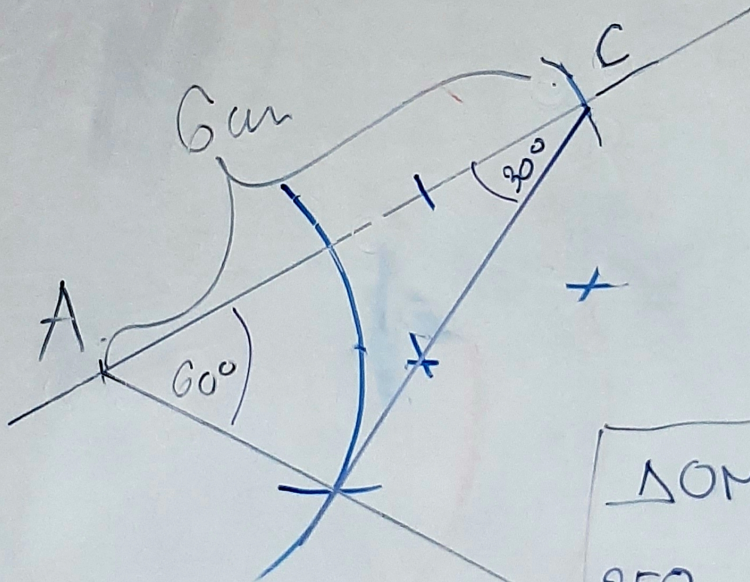
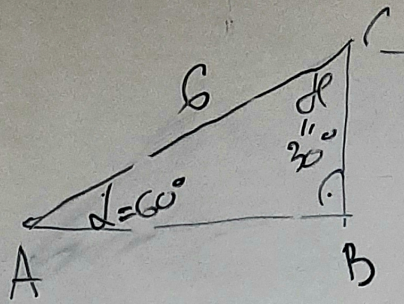
B)  $b =$   
 $c =$   
 $\alpha =$

A



350.)

B)  $b = 6\text{cm}$   
 $\alpha = 60^\circ$   
 $\beta = 30^\circ$



ΔΟΜΑΤΗ:

350. Α)  
β)